

KAMPALA PARENTS' SCHOOL 2004

PRE-P.L.E. SET VII EXAMINATION, 2022

SOCIAL STUDIES AND RELIGIOUS EDUCATION

Time Allowed: 2 hours 15 minutes

Index No.	EMIS NO	Personal No.									
	<table border="1" style="width: 100%; border-collapse: collapse;"> <tr> <td style="width: 16.6%; height: 20px;"></td> <td style="width: 16.6%;"></td> <td style="width: 16.6%;"></td> <td style="width: 16.6%;"></td> <td style="width: 16.6%;"></td> <td style="width: 16.6%;"></td> </tr> </table>							<table border="1" style="width: 100%; border-collapse: collapse;"> <tr> <td style="width: 33.3%; height: 20px;"></td> <td style="width: 33.3%;"></td> <td style="width: 33.3%;"></td> </tr> </table>			

Candidates Name

Candidates' Signature

EMIS No.

District Name

DO NOT OPEN THIS BOOKLET UNTIL YOU ARE TOLD TO DO SO

Read the following instructions carefully.

1. This paper is made up of two Sections: A and B.
2. Answers to both sections must be written in the spaces provided in full sentences.
3. Section A has 40 questions (40 marks)
4. Section B has 15 questions (60 marks)
5. Attempt all questions. All answers to both sections A and B must be written in the spaces provided.
6. All answers must be written in blue or black ballpoint pen or ink but not in pencil. All work done in pencil, except diagrams, will **NOT** be marked.
7. Crossing out of answers will lead to loss of marks.
8. Any handwriting that cannot be easily read may lead to loss of marks.

FOR EXAMINERS USE ONLY		
QN. NO.	MARK	SIGN
1 - 10		
11 - 20		
21 - 30		
31 - 40		
41 - 43		
44 - 46		
47 - 49		
50 - 52		
53 - 55		

SECTION A: 40 MARKS

1. Give one role of a grandparent in an extended family.


2. State one way peace brings development in a country?

3. How did the coming of Arabs lead to depopulation in East Africa?

4. Give one example of a social service centre in your district.

5. Give the importance of a radio station in the community.

6. What does the road sign below mean?



7. How can the tourism industry in East Africa be developed?

8. Give one way the mangrove forests promote the farming industry in East Africa.

9. Give any one political contribution of I. K. Musaazi to Uganda.

10. State one effect of immunization to a country like Uganda.

11. Why should good hotels be built near game parks?

12. State one advantage of using indirect rule to the British colonialists.

13. Give any one example of a tertiary industry.

14. Why was the 1894 treaty signed?

15. Why is it important to have a market in the community?

16. Name the nationalist who led Kenya to independence.

17. State one effect of destroying swamps for crop growing.

18. Name the body that was formed immediately after the First World War to ensure world peace.

19. State one way the government of Uganda can support the local communities to improve their livelihood.

20. Write **OPEC** in full.

21. What do we call maps which are not drawn to scale?

22. State one way children benefit from school assemblies.

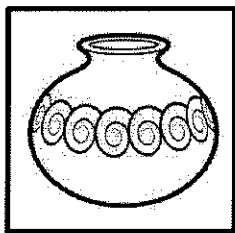
23. How did chiefs benefit from Long Distance Trade?

24. Which factor makes mountains to have different vegetation zones?

25. What did European countries do to avoid conflicts when sharing territories of Africa?

26. Name the tribal group which originated from Bahr-el-Ghazel in Sudan.

27. Name the raw material for the craft below.



28. State any one importance of having a music festival in the community.

29. State one cause of land conflicts today.

30. How were the Abarusura important to Omukama Kabalega of Bunyoro?

31. Apart from introducing Christianity, state any other reason why missionaries came to East Africa.

32. Why are some places more populated than others?

33. State one reason why the movement of goods and people within Kenya, Uganda and Tanzania increased after 2001.

34. Why is a weather station important at school?

35. What name is given to the temperate grasslands of South Africa?

For questions 36-40, answer either Christianity or Islam but not both.

36. **Either:** What title is given to the leader of Anglicans in Uganda?

Or: What title is given to the leader of Muslims in Uganda?

37. **Either:** Give any one effect of Adam and Eve's disobedience.

Or: Give any one effect of Adam and Hawa's disobedience.

38. **Either:** Give a reason why God called Abraham.

Or: Give a reason why Allah called Ibrahim.

39. **Either:** Who is regarded as a prince of peace in Christianity?

Or: Who is referred to as Al-min?

40. **Either:** Mention the last book in the Bible.

Or: Mention the last obligatory prayer in Islam.

SECTION B

41. a) Mention two ways of becoming a citizen in Uganda.

i) _____

ii) _____

b) Give two ways citizens help in the promotion of democracy.

i) _____

ii) _____

42. a) State two reasons why road transport is commonly used in East Africa.

i) _____

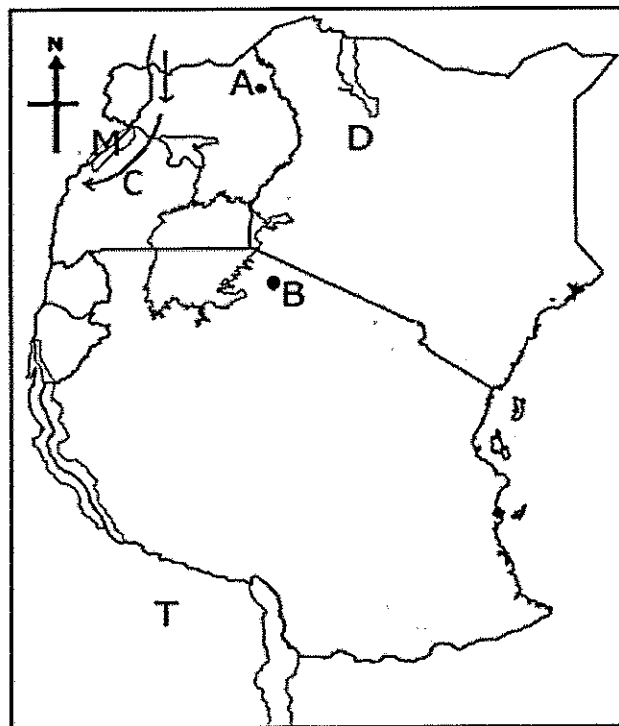
ii) _____

b) Give any two common causes of road accidents.

i) _____

ii) _____

43. **Study the sketch map of East Africa below and use it to answer questions that follow.**



a) Name minerals mined at areas marked:

i) **A** : _____

ii) **M** : _____

b) Name the country marked **T**.

c) Name the European explorer who used route **C**.

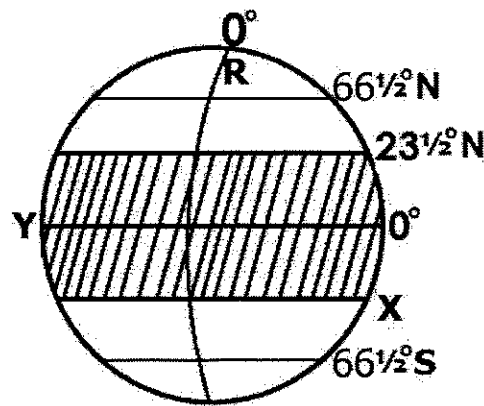
44. a) Give any two reasons why the Bachwezi are still remembered in East Africa.

- i) _____
- ii) _____

b) State any two reasons for the collapse of Bunyoro-Kitara Empire.

- i) _____
- ii) _____

45. **Study the diagram below and use it to answer questions that follow.**



a) Name the shaded part ///////////////.

b) Name the month when the sun overheads the imaginary line marked **X**.

c) Why is line **Y** marked **0°**?

d) Name the city in Africa crossed by longitude marked **R**.

46. a) Name any two services a community expects the government to provide to them.

- i) _____
- ii) _____

b) Give two reasons why the government at times fails to meet people's needs.

- i) _____
- ii) _____

47. a) Which method of administration did the Germans introduce in Tanganyika?

b) Give two reasons why the above method faced a lot of resistance in Tanganyika.

- i) _____
- ii) _____

c) Who was the first British administrator in Tanganyika?

48. a) Write **IBEACo** in full.

b) Give two reasons why IBEACo failed in its activities in East Africa.

i) _____

ii) _____

c) How did IBEACo promote transport in East Africa?

49. a) How was Lake Victoria formed?

b) Give one reason why Lake Victoria has fresh water.

c) Apart from fishing, give any two economic importance of water bodies.

i) _____

ii) _____

50. a) What is child abuse?

b) Mention any two common examples of child abuse in society.

i) _____

ii) _____

c) Give a reason why children's rights should be promoted.

For questions 51-54, answer either Christianity or Islam but not both.

51. **Either:**

a) What name is given to the books that talk about the life of Jesus Christ?

b) Mention two of those books in (a) above.

i) _____

ii) _____

c) Name the gospel write who was a doctor.

Or:

a) Name two books which were revealed to prophets in Islam.

i) _____

ii) _____

b) Give two roles of prophets in Islam.

i) _____

ii) _____

52. **Either:**

a) Give two reasons why God called Moses on Mt. Sinai.

i) _____

ii) _____

b) State any two problems the Israelites faced during Exodus.

i) _____

ii) _____

Or:

a) Give two reasons why Allah called prophets.

i) _____

ii) _____

b) State any two challenges Prophet Muhammad faced in his work.

i) _____

ii) _____

53. **Either:**

a) Name the town where Jesus was born.

b) Why did God send Jesus on earth?

c) Mention any two lessons you can learn from Jesus' perfect life.

i) _____

ii) _____

Or:

a) Name the town where Jesus was born.

b) Why did God send Jesus on earth?

c) State any two lessons you learn from Prophet Muhammad.

i) _____

ii) _____

54. **Match items in list A with those in list B correctly.**

List A

- i) Adam
- ii) Abraham
- iii) Isaac
- iv) Joseph

List B

- Foster father of Jesus.
- Father of Esau and Jacob.
- Accepted to sacrifice his son to God.
- Means mankind.

- i) Adam: _____
- ii) Abraham: _____
- iii) Isaac: _____
- iv) Joseph: _____

Or: Match items in list A with those in list B.

List A

- i) Abdullah
- ii) Sarah
- iii) Khadijah
- iv) Musa

List B

- Received the Tauret.
- first wife of Prophet Muhammad.
- Father of Prophet Muhammad.
- Wife of Prophet Muhammad.

- i) Abdullah: _____
- ii) Sarah: _____
- iii) Khadijah: _____
- iv) Musa: _____

55. **For Both:**

a) Mention two similar beliefs between Christians and Muslims.

- i) _____
- ii) _____

b) Give two differences in beliefs between Christians and Muslims.

- i) _____
- ii) _____

***** Good Luck *****